

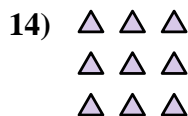

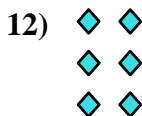


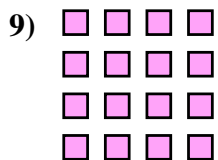




Write each array as an addition problem and solve.



Answers



Ex. 4+4+4=12



- 1. _____
- 2. _____
- 3. _____
- 4. _____
- 5. _____
- 6. _____
- 7. _____
- 8. _____
- 9. _____
- 10. _____
- 11. _____
- 12. _____
- 13. _____
- 14. _____



Write each array as an addition problem and solve.



Answers

Ex. 4+4+4=12

1. 5+5=10

2. 5+5+5=15

3. 5+5+5+5=20

4. 3+3+3+3=12

5. 4+4+4+4+4=20

6. 3+3=6

7. 5+5+5+5+5=25

8. 2+2=4

9. 4+4+4+4=16

10. 3+3+3+3+3=15

11. 4+4=8

12. 2+2+2=6

13. 2+2+2+2=8

14. 3+3+3=9

